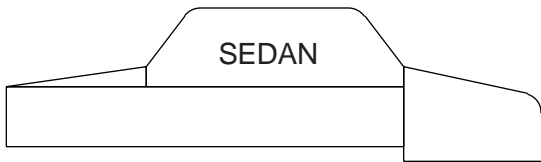


VEHICLE TEST WORKSHEET

Name: _____

Class period number: _____

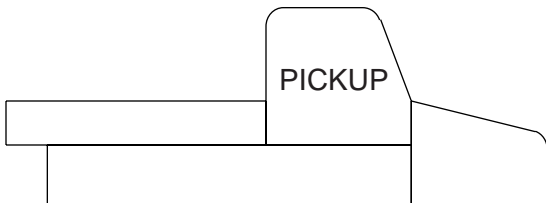
Record the Vehicle's drag in grams (ignore the lift gauge) then sketch the path that the yarn takes over and under each shape. Place the worksheet in your student notebook when finished.



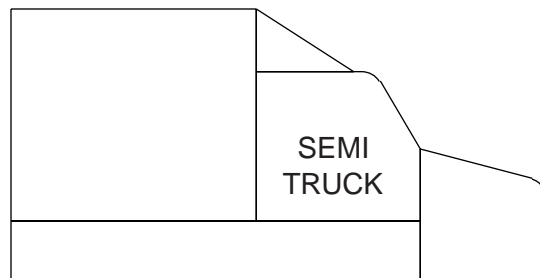
Drag _____ grams



Drag _____ grams



Drag _____ grams



Drag _____ grams